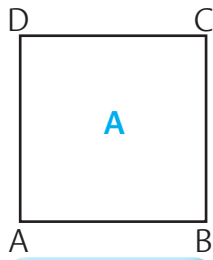


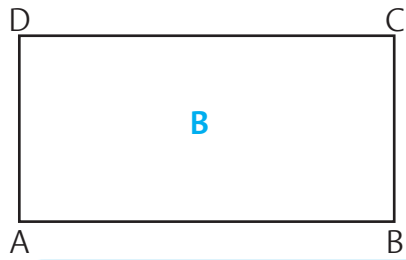


ESERCITATI

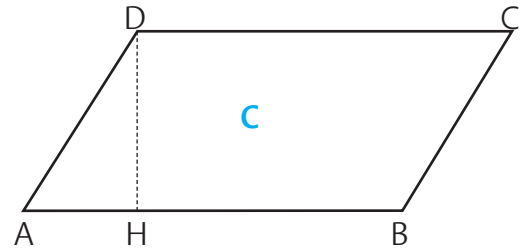
Calcola l'area delle seguenti figure.



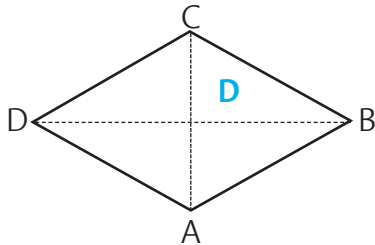
AB = 6 cm



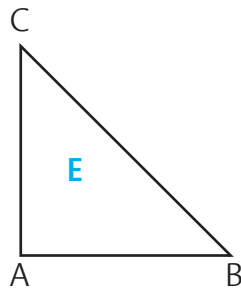
AB = 11 cm BC = 6 cm



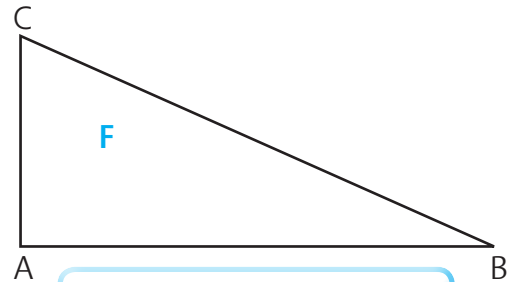
AB = 13 cm DH = 6 cm



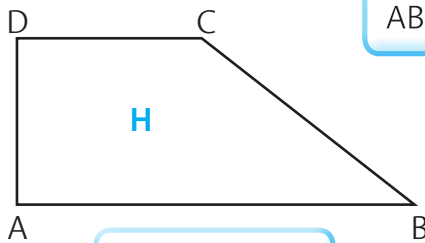
DB = 12 cm AC = 7 cm



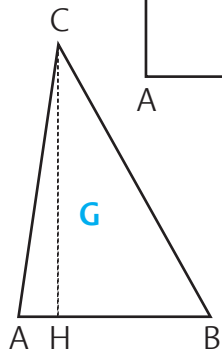
AB = AC = 7 cm



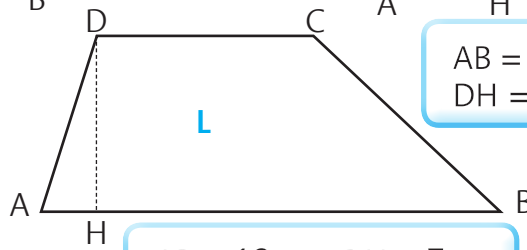
AB = 14 cm AC = 7 cm



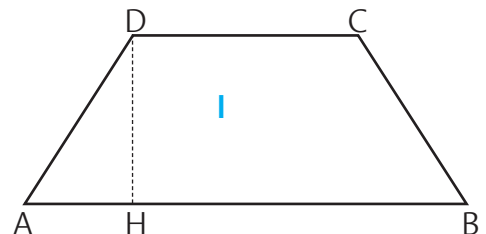
AB = 15 cm
CD = 7,5 cm
AD = 7,5 cm



AB = 5 cm CH = 7 cm



AB = 19 cm DH = 7 cm
CD = 11 cm



AB = 16 cm CD = 6 cm
DH = 7 cm

A = quadrato	$A = l \times l$	A = cm ²
B = rettangolo
C =
D =
E =
F =
G =
H =
I =
L =